


Opakovanie – noty c1-g2

Dopíš noty:

The image shows three musical staves, each with a treble clef. The notes and their labels are as follows:

- Staff 1: e<sup>1</sup>, g<sup>1</sup>, h<sup>1</sup>, a<sup>1</sup>, f<sup>1</sup>, d<sup>1</sup>, e<sup>1</sup>, d<sup>1</sup>, c<sup>1</sup>
- Staff 2: c<sup>2</sup>, e<sup>2</sup>, d<sup>2</sup>, f<sup>2</sup>, e<sup>2</sup>, g<sup>2</sup>, e<sup>2</sup>, d<sup>2</sup>, c<sup>2</sup>
- Staff 3: c<sup>1</sup>, c<sup>2</sup>, d<sup>1</sup>, d<sup>2</sup>, e<sup>1</sup>, e<sup>2</sup>, f<sup>1</sup>, f<sup>2</sup>, g<sup>1</sup>

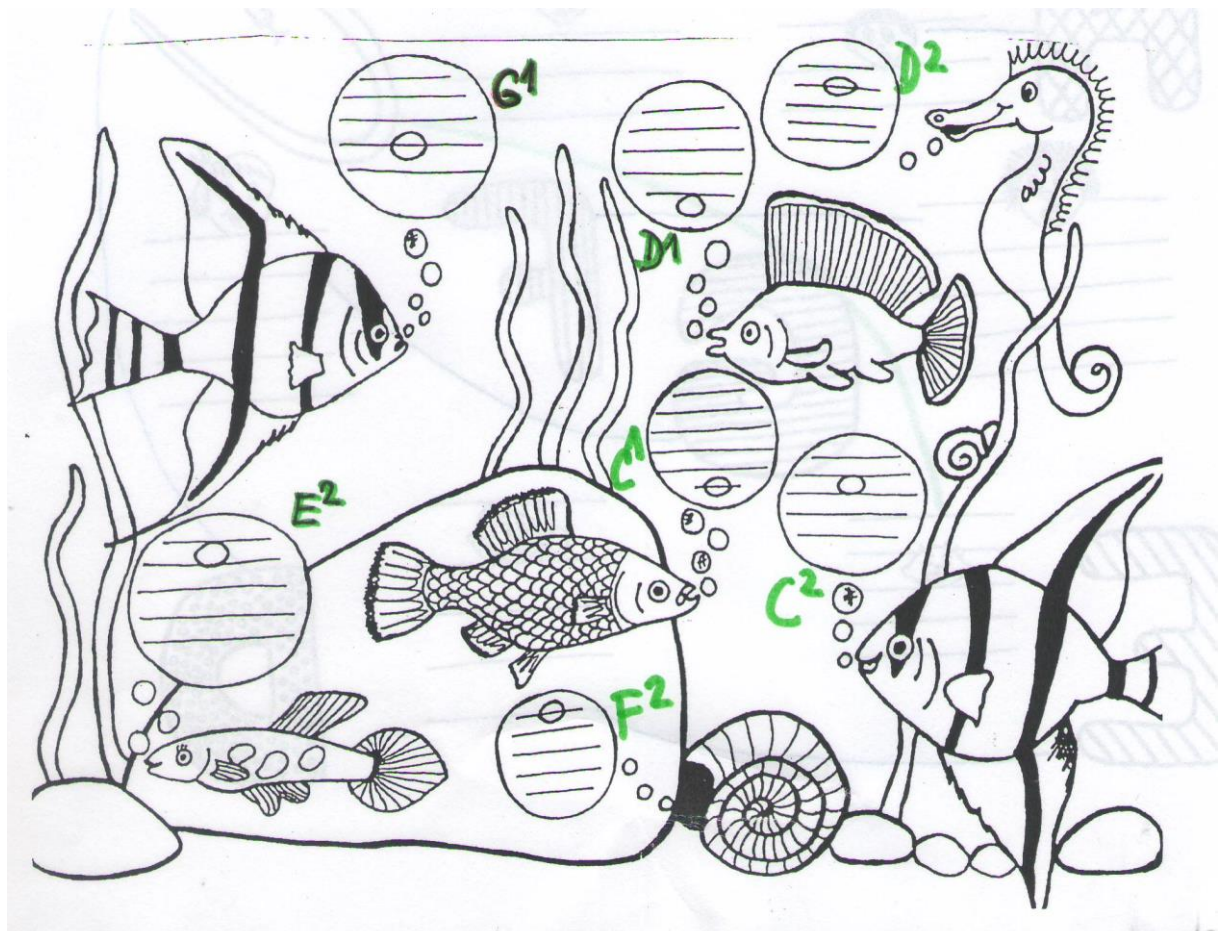
Dopíš názvy nôt:










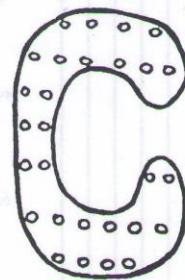

Over si správne odpovede:

Three staves of musical notation in treble clef. The notes and their corresponding labels are as follows:

Staff	Note	Label
1	Quarter note, G4	$g^1$
1	Quarter note, A4	$a^1$
1	Quarter note, B4	$b^1$
1	Quarter note, C5	$c^1$
1	Quarter note, B4	$b^1$
1	Quarter note, A4	$a^1$
1	Quarter note, G4	$g^1$
1	Quarter note, F4	$f^1$
1	Quarter note, E4	$e^1$
2	Quarter note, C4	$c^2$
2	Quarter note, D4	$d^2$
2	Quarter note, E4	$e^2$
2	Quarter note, F4	$f^2$
2	Quarter note, G4	$g^2$
2	Quarter note, A4	$a^2$
2	Quarter note, B4	$b^2$
2	Quarter note, C5	$c^2$
3	Quarter note, C4	$c^1$
3	Quarter note, D4	$d^1$
3	Quarter note, E4	$e^1$
3	Quarter note, F4	$f^1$
3	Quarter note, G4	$g^1$
3	Quarter note, A4	$a^1$
3	Quarter note, B4	$b^1$
3	Quarter note, C5	$c^1$
3	Quarter note, B4	$b^1$
3	Quarter note, A4	$a^1$
3	Quarter note, G4	$g^1$



Poznáš písmená a noty? Tak ich pospájaj.








Podľa názvu veci na obrázku /podľa začiatočného písmena/ urči názov noty a napíš ju do not. osnovy:


Dopíš noty a pomenuj napísané noty:

$e^1$   $d^1$   $a^1$   $c^1$   $g^1$   $f^1$   $a^1$   $h^1$   $c^2$   
 $c^1$   $g^2$   $e^2$   $f^2$   $d^2$   $c^2$   $a^2$   $h^2$   $e^2$

Správne odpovede:

 <sup>1</sup>		 <sup>1</sup>		 <sup>2</sup>	
 <sup>1</sup>		 <sup>1</sup>		 <sup>2</sup>	
 <sup>1</sup>		 <sup>2</sup>		 <sup>2</sup>	
 <sup>2</sup>		 <sup>2</sup>		 <sup>2</sup>	









POMENUJ NOTY V OKIEŤKACH



POMENUJ NOTY V OKIEŤKACH



# Květinové bludiště



$\frac{2}{4}$  TAKT - ČERVENÁ



$\frac{3}{4}$  TAKT - ŽLTÁ

